

Introduction to radians

Ifan Howells-Baines, Mark Toner

Summary

Radians are an important concept to understand in mathematics. They are used instead of degrees in areas like calculus and trigonometry, and so becoming comfortable converting between radians and degrees is an important skill. This guide also explains how to find lengths of circular arcs and areas of circular sectors.

What are radians?

Radians, like degrees are a way of measuring the size of angles and can often be identified by the presence of π .

Radians are the SI unit for angles derived from the **radius of a circle**, which makes them especially useful when working with circles. You will see this relationship more in the following section on arc length and sector area. Radians are denoted by the symbol **rad**, or sometimes by $^{\circ}$ (although this is slightly older).

Radians are exclusively used to describe angles in calculus; therefore if you want to study calculus in the future it is *extremely* important to understand how to convert between degrees and radians, and be comfortable using radians more generally.

This guide will firstly describe the relationship between radians and circles. Then it will describe the relationship between radians and degrees showing how to convert between them. Lastly, it will provide a table of some useful degree to radians conversions for common angle sizes.

Radians and circles

Before you see the close relationship between radians and circles, it is important to understand what **arcs** and **sectors** are.

i Definition of a circular arc

Pick any two different points on a circle and draw a curve between them, following the circle. This curve is known as a **circular arc**, but this is usually shortened to **arc**.

 Tip

A **circle** does not include the interior of the circle. A circle together with its interior is called a **disk**.

 **Example 1**

Figure 1 shows an example of an arc.

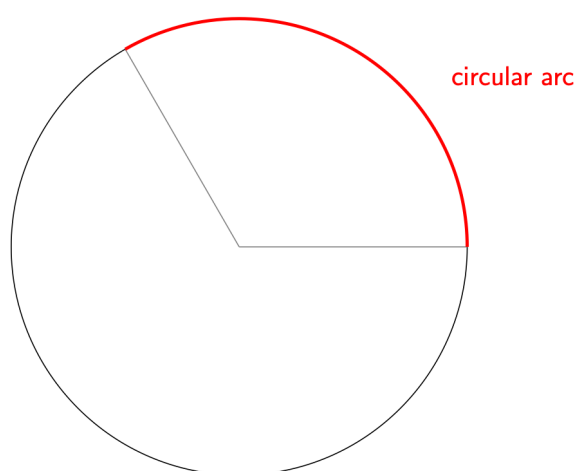



Figure 1: A circular arc.

 Definition of a circular sector

Pick two different points on a circle and draw two radiuses between them and the centre. The area enclosed by these two radiuses of the circle and the arc between the points is called a **circular sector**, but this is usually shortened to **sector**.

 **Example 2**

Figure 2 is an example of a sector.

These two concepts form the foundations to to precisely explain the definition of a radian.

Pick any two points on a circle such that the length of the arc between them is **equal to the radius of the circle** and draw radiuses from these points to the centre. The angle between

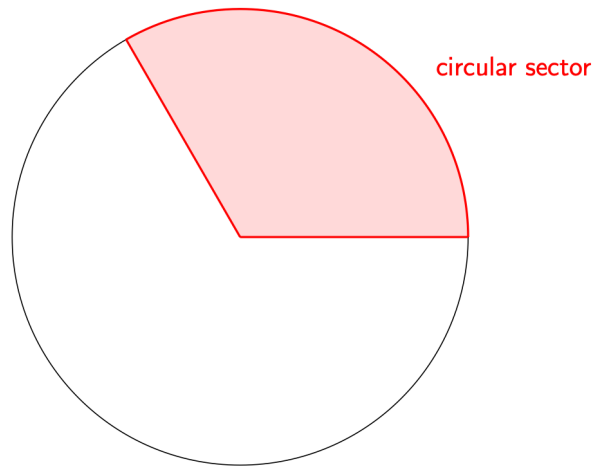


Figure 2: A circular sector.

these two lines at the centre is defined to be 1 radian. A precise way to say this is:

i Definition of a radian

One **radian** is the angle formed by the section of circle where the length of the arc a is the radius r . See Figure 3 for a picture of this.

More generally, the angle θ in radians is defined by a/r , where a is the length of the arc and r is the radius of the circle.

💡 Tip

You can notice that the size of the circle does not change the value of 1 rad - it is the same in any circle.

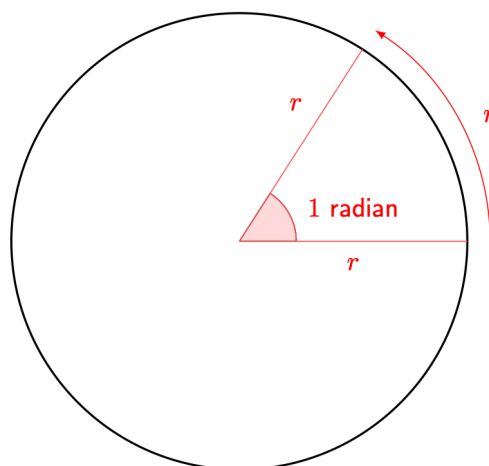


Figure 3: A visual representation of a radian.

Using this definition, you can find the number of radians in a full circle. The well-known equation $c = 2\pi r$, where c is the circumference of a circle and r the radius, tells you that you can fit sectors with arc length r side by side into the circle 2π times. Since each of these sectors has an angle of 1 radian at the centre, it follows that there are 2π radians in the whole circle.

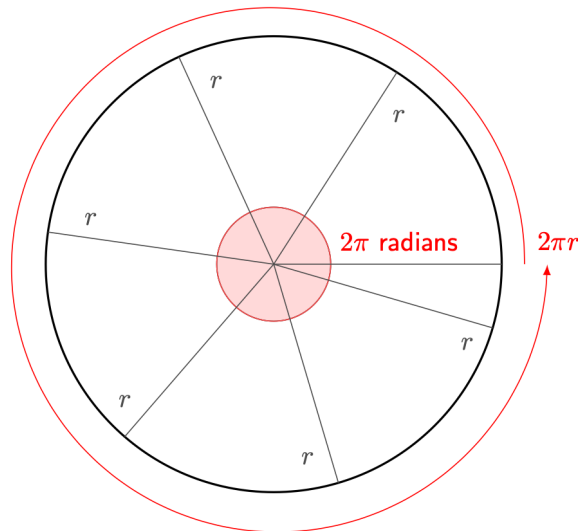


Figure 4: A circle divided by sectors with arc length equal to the radius.

Converting between radians and degrees

The process for converting from radians to degrees and from degrees to radians are direct opposites to each other.

Converting from degrees to radians


i Converting angles from degrees to radians

Starting from an angle in degrees:

1. Multiply the angle in degrees by π
2. Divide the result by 180

Your angle is now in radians.

More precisely, suppose you have an angle of x degrees. Then your angle in radians is equal to $x\pi/180$. In particular, one degree is equal to $\pi/180$ radians.

 Warning

Where possible, remember to simplify fractions at the very end of your working.

i Example 3

You are given the angle 180° to convert to radians.

- Multiplying by π gives 180π
- Dividing by 180 gives π

This means that 180° is equal to π rad.

Alternatively, you could put $x = 180$ into the formula $x\pi/180$ to obtain $180\pi/180 = \pi$ as the angle in radians.


i Example 4

You are given the angle 45° to convert to radians.

- Multiplying by π gives 45π
- Dividing by 180 gives $\frac{\pi}{4}$

This means that 45° is equal to $\frac{\pi}{4}$ rad.

Alternatively, you could put $x = 45$ into the formula $x\pi/180$ to obtain $45\pi/180 = \pi/4$ as the angle in radians.

 Warning

You can notice that angles in radians are typically given as fractions of π , rather than decimal numbers. In mathematics, it is usually better to express your answer **exactly** rather than as a decimal approximation.

Converting from radians to degrees

i Converting angles from radians to degrees

Starting from an angle in radians:

- Multiply the angle in radians by 180
- Divide the result by π

Your angle is now in degrees.

More precisely, suppose you have an angle of y radians. Then your angle in degrees is equal to $180y/\pi$. In particular, one radian is equal to $180/\pi = 57.295$ degrees (to three decimal places).

i Example 5

You are given the angle $5\pi/4$ rad to convert to degrees.

- Multiplying by 180 gives $900\pi/4 = 225\pi$
- Dividing the result by π gives 225.

This means that $5\pi/4$ rad is equal to 225° .

Alternatively, you could put $y = 5\pi/4$ into the formula $180y/\pi$ to obtain $900\pi/4\pi = 225$ as the angle in degrees.

i Example 6

You are given the angle $\frac{\pi}{6}$ rad to convert to degrees

- Multiplying by 180 gives $180\pi/6 = 30\pi$
- Dividing the result by π gives 30.

This means that $\frac{\pi}{6}$ rad is equal to 30° .

Alternatively, you could put $y = \pi/6$ into the formula $180y/\pi$ to obtain $180\pi/6\pi = 30$ as the angle in degrees.

Useful conversions to know

Here is a table of useful conversions of degrees to radians that come up often:

Angle in degrees	0	30	45	60	90	120	135	150	180	270	360
Angle in radians	0	$\frac{\pi}{6}$	$\frac{\pi}{4}$	$\frac{\pi}{3}$	$\frac{\pi}{2}$	$\frac{2\pi}{3}$	$\frac{3\pi}{4}$	$\frac{5\pi}{6}$	π	$\frac{3\pi}{2}$	2π

Arc length and sector area

If you have two radiuses of the circle and know the angle, in radians, between these radiuses, then you can calculate the length of the arc between these lines.

i Equation for arc length

The length s of an arc between two points is given by $s = r\theta$, where r is the radius of the circle and θ is the angle, in radians, between the radiuses of the two given points.

To see why this equation holds, convince yourself that this equality is true (c is the circumference of the circle):

$$\frac{s}{c} = \frac{\theta}{2\pi}.$$

If you substitute $c = 2\pi r$ into this equality, you get

$$\frac{s}{2\pi r} = \frac{\theta}{2\pi}.$$

Finally, rearranging gives you the equation

$$s = r\theta.$$

Similar to arc length, you can get an equation in terms of radians to calculate the area of a sector.

i Equation for sector area

The area A of a sector of a circle with radius r and angle θ at the centre (in radians) is given by $A = \frac{1}{2}r^2\theta$.

i Example 7

You are given a circle with radius 4. Find the length of arc and the area of the sector covering an angle of $2\pi/3$ radians.

Using the formula for length of arc with $r = 4$ and $\theta = 2\pi/3$ gives

$$s = 4 \cdot \frac{2\pi}{3} = \frac{8\pi}{3}.$$

Similarly, using the formula for area of the sector with $r = 4$ and $\theta = 2\pi/3$ gives

$$A = \frac{1}{2} \cdot \frac{4^2 \cdot 2\pi}{3} = \frac{32\pi}{6} = \frac{16\pi}{3}.$$

Quick check problems

1. You are given three degree to radians conversions. Determine whether they are true or false.

(a) $15^\circ = \frac{\pi}{12}$ rad

(b) $450^\circ = \frac{5\pi}{2}$ rad

(c) $720^\circ = 2\pi$ rad

2. You are given three radians to degrees conversions. Determine whether they are true or false.

(a) $\frac{\pi}{24}$ rad = 10°

(b) 3π rad = 540°

(c) $\frac{3\pi}{4}$ rad = 140°

3. Find the following quantities:

(a) length of arc of circle with radius 3 over an angle of $5\pi/6$ radians.

(b) area of sector of circle with radius 2 over an angle of $\pi/4$ radians.

Further reading

For more questions on the subject, please go to [Questions: Radians](#).

To see how trigonometry interacts with radians as a measure of an angle, see [Guide: Introduction to trigonometry \(radians\)](#) and [Guide: Trigonometric identities \(radians\)](#).

Version history and licensing

v1.0: initial version created 08/23 by Ifan Howells-Baines and Mark Toner as part of a University of St Andrews STEP project.

- v1.1: edited 04/24 by tdhc.

This work is licensed under [CC BY-NC-SA 4.0](#).